

ENGLISH (CLASS - V)

I. Frame sentences with the following words and phrase.

- 1) Attention to 2) believe 3) attracted 4) concerned 5) Favourite 6) Locality

II. Change these sentences as directed in the brackets.

- 1) It was a splendid performance. (Exclamatory)
2) Tell me how you cooked this dish. (Interrogative)
3) Can you drop me at the shopping mall? (Imperative)
4) I reached home yesterday. (Interrogative)
5) Haven't you been waiting here for quite some time? (Imperative)

III. Rearrange these words to make meaningful sentences.

- 1) Dhara / before/ never seen / a camel / has
2) The children / enjoy / puppet shows / always
3) the/ man/travelled/a/old/had/and/long /way/ was/ tired".
4) in/ the/ morning/ I/ love/ fresh/ air/ the/ breathe
5) delicious/ her/ cookies/ baked/ chocolate/ mother
6) under/ the/ the/ sky/ stars/ we/ camped/ countless
7) my/ the/ happy/ on/ made/ birthday/ friends/ me

IV. Prepare a dictionary having minimum of two words for each alphabet from A to Z with meanings to enhance your vocabulary. (For this, prepare a handbook.)

V. Draw a picture of the best character from the book you read during the vacation and mention 5 points why you liked it/him/her.

VI. Write a passage on anyone topics:

- (a) My grandmother (b) Save water (c) How I spend my holiday

VII. Write a letter to your friend who has shifted to a new locality asking her / him how she / he is doing.

VIII. Write and learn 15 synonyms and 15 Antonyms from your grammar book. Pg. no. 25.

IX. Write 10 page handwriting in your writing notebook.

X. Write and Learn question and answer of Chapter 1 and 2.

HINDI (V)

(क) 'र' वर्ण का सही चिह्न लगाकर शब्द लिखे :

कम , पकाश , कमांक , भमण , पजापति, पण, वाषिक

(ख) वर्ण विच्छेद करे :

समूह , स्वर , कामना , गृहकार्य , विपिन , ज्वाला

(ग) शब्द सीढ़ी बनाए , हर वर्ण से 20- 20 शब्द ।

(घ) मानव शरीर के अंगों का प्रयोग करते हुए कोई आठ मुहावरे लिखे ।

(ङ) बताओ मैं कौन हूँ :

1. हरी-हरी लाल कमान , तोबा - तोबा करे इन्सान, बताओ मैं कौन हूँ ।
2. कान है पर बहरी हूँ, मुँह है पर मौन हूँ, आंख है पर अंधी हूँ, बताओ मैं कौन हूँ ।
3. एक राजा की अनोखी रानी, दुम के रास्ते पीती पानी ।
4. ऐसा कोण सा वार है, जो सात वारो से भी ज्यादा जरूरी होता है ।

(च) दिए गए संयुक्त व्यंजन का प्रयोग करते हुए शब्द बनाए :

1. मं
2. प्र
3. त
4. द्ध

(छ) आप बड़े हो कर क्या बनना चाहते हैं ? एक अनुच्छेद लिखकर इस बारे में जानकारी दीजिये तथा अनुच्छेद- लेखन में अधिकांशतः भविष्यत काल के वाक्यों का प्रयोग कीजिये ।

(ज) सवाद लेखन विषय : (माँ और दूधवाला के बिच)

(झ) विश्व प्रिय पर्यावरण दिवस के अवसर पर एक पोस्टर बनाए ।

(ञ) अभी गरमी का दिन है निम्बू का शरबत की विधि लिखे और खुद बनाकर घर के प्रत्येक सदस्य को पिलाये ।

MATHS(V)**1. Solve and write the answer in Roman numeral-**

(i) $XCV (-) XIV =$

(ii) $XCII (+) VIII =$

(iii) $XCV (-) XXV =$

(iv) $LXIII (\div) VII =$

(v) $XXVII (x) XII =$

(vi) $LXVI (\div) XI =$

2. Mark period and write number name both in Indian Number System and International Number System :

(i) 9909009 (ii) 115604025 (iii) 9375660 (iv) 1504707 (v) 7590000 (vi) 16631000

3. Solve the problems with statement:

(i) A company earned ₹ 14632739 in the year 2011. Next year the earning of the company increased by ₹ 3974687. How much did the company earn in the year 2012?

(ii) The sum of two numbers is 3148654. If one of the number is 1952789, find the other number.

(iii) The cost of the steel almirah is ₹ 5975. What is the cost of 864 such almirahs?

(iv) The cost of a toy is ₹ CDXLI. What will be the cost of XIV such toys? (All values given in Roman Numeral)

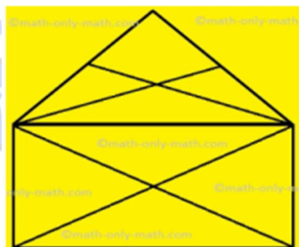
(v) How much is 7 crore more than five lakh seventy eight thousand?

4. Solve the following:

(i) If 'PALE' is coded as 2134, 'EARTH' is coded as '41590', then how is 'PEARL' coded?

(ii) If in a certain code, 'PIGEON' is coded as 7 and 'BELIEVED' is called as 9, then what is the code for 'CONTINUOUS'?

(iii) If in a code language 'MAN' is coded as 28 and 'GIRL' is coded as '46', then how will be 'WOMAN, coded?

5. Count the number of triangles in the given figure:**6. Solve all the questions and arrange their answers in ascending order:**



(i) $2459 \times 673 =$

(ii) $620154 \div 789 =$

(iii) $434987 + 673088 + 1233 =$

(iv) $90458740987 - 28466 =$

7. On a chart paper, complete the given project, write all answers in Roman numerals:

<p>Know your body</p> 	<p>MY NAME: _____</p> <p>MY CLASS/SEC: _____</p> <p>SUBJECT: _____</p>
<p>1) How many sense organs do you have?</p>	
<p>2) How many bones does an adult human body have?</p>	
<p>3) How many teeth do you have?</p>	
<p>4) Given below are few data related to human body. Express all these data as Roman Numerals:</p>	
<p>Given 24 hours your body will:</p>  <p>Blink 23,040 times</p> <p>Beat 100,000 times</p> <p>Breathe 23,000 times</p> <p>Filter 1,500 litres of blood</p> <p>Produce 2 litres of acid</p>	<p>a) Our eyes blink ____many times in 24 hours.</p> <p>b) Our heart beats ____many times in 24 hours.</p> <p>c)Lungs breathe ____many times in 24 hours.</p> <p>d) Liver filters ____litres of blood in 24 hours.</p>

SCIENCE(V)

I. Answer the following questions:

- (a) Which 3 jobs the skeletons do in our body?
- (b) What is joint ? Name the types of joints.
- (c) What is the difference between voluntary and involuntary muscles?
- (d) Name the different parts of the brain. Mention the functions of each part.
- (e) Why is the colour of blood is red?
- (f) Write the difference between Veins and Capillaries?

II. Give answer in one word:

- (a) A cage of bones around chest. _____
- (b) A joint allows backward and forth movement. _____
- (c) The mineral required for strong bones. _____
- (d) Tubes in which blood flows across the body. _____
- (e) Thin walled tubes that carry blood back to heart. _____
- (f) An adult human body has how many bones. _____
- (g) In a adult, the heart pumps in an average blood how much time in a minute. _____

III. Match the column:

Column A

- (i) Aorta
- (ii) Valve
- (iii) Jelly like structure
- (iv) Bad posture
- (v) Made of two bones

Column B

- (a) Vein
- (b) Main artery
- (c) Lower leg
- (d) Bone marrow
- (e) Back Pain

IV. Draw a labelled diagram of the heart.

V. Draw the flow cart of journey of blood in our body.

VI. Take help of your mother to prepare AAM PANNA for your family. List the various steps involved and also the benefits of the drink.

SST(V)

I) Fill in the blanks: -

- 1) An _____ is an imaginary line that divides the earth into two equal halves.
- 2) Both the Tropic of Cancer and the Tropic of Capricorn lie at an _____ distance from the equator.
- 3) _____ is taken as a parameter for measuring the altitude of a place.

II) Name the following:

- 1) This latitude lies near the North Pole in the Northern Hemisphere at $66\frac{1}{2}^{\circ}\text{N}$.
- 2) The regular pattern of weather for over a long period of time.
- 3) A quantity representing the amount of water vapour in the atmosphere or in a gas.

III) Answer the following questions: -

- 1) Distinguish between features of lines of latitude and longitude with the help of diagram.
- 2) How do winds and distance from sea affect the climate ?
- 3) How have human actions contributed to changes in the climate? (Write any three points)
- 4) List 3 ways in which rivers are useful to us.
- 5) Look at the map of world showing heat zones of the earth. Find out and then write down:-
 - a) Name of 9 countries for each zone.
 - b) Name of 5 cities that fall in different climate zones of India.

IV) Make the following chart and write down the coordinates of the places given below: -

PLACES

LATITUDE

LONGITUDE

Moscow

Paris

Berlin

Beijing

V. Unscramble the following and write their values in degrees: -

- (a) EPRIM NADIIMER (b) TICANTARC LERCCI (c) CIPROT FO NACCER

VI) On a political map, write all states and their Capital names.

GENERAL STUDIES (CLASS-V)

I) Given below is a world map showing continents and oceans of the world. Study the map carefully and solve the riddles. (Note down the riddle questions also)



- (a) I am located in the northern part of the earth and I am covered with ice. Which ocean am I?
- (b) I have the largest desert in the world 'Sahara', and I am also known as the 'Dark Continent'.
- (c) I am the only continent with no deserts. Which continent am I?
- (d) I am the largest ocean in the world. I also have the deepest point called Mariana Trench. Which ocean am I?

II. Unscramble and write the names of the five oceans of the world given in column A. Also match them with the facts given in Column B .Write the facts in front of the ocean names. One example is given below:

1. Indian Ocean - (d) known as "Ratnakara" in Sanskrit

Column A

- 1. DANINI _____ OCEAN
- 2. RCTACI _____ OCEAN
- 3. USTONHR _____ OCEAN
- 4. FICAPIC _____ OCEAN
- 5. TLATANIC _____ OCEAN

Column B

- (a) Covers 30% of the earth surface
- (b) Also known as Antarctic Ocean
- (c) The smallest ocean in the world.
- (d) Known as 'Ratnakara' in Sanskrit
- (e) Derived from the Greek mythology meaning The 'Sea of Atlas'

TRANSLATION (Translate the following sentences in English)

- 1. उसने तुम्हे धोखा(Cheat) नहीं दिया।
- 2. आज अध्यापक ने हमें सजा(Punishment) दी।
- 3. क्या उसने चोरी की ?
- 4. रुद्र ने किताब क्यों फाड़ी ?
- 5. वह पेंटिंग बना चुका था।
- 6. हमने उसे आमंत्रित(invitation) नहीं किया था।
- 7. तुमने यह फिल्म कब देखी थी ?
- 8. हम सुबह से सब्जियां काट रहे थे।