

ENGLISH (CLASS - IV)

I. Frame sentences with the following words and phrase.

- 1) appeared 2) perched 3) keep an eye on 4) leaned back 5) justice

II. Change these sentences as directed in the brackets.

- 1) My shirt is new.(Change it into a negative sentence and rewrite it .)
2) You must clean your room .(Rewrite the sentence after changing it into imperative .)
3) I love to eat ice -creams . (Write whether it is ASSERTIVE or IMPERATIVE SENTENCE)
4) It is a beautiful picture. (Change this sentence into exclamatory sentences)
5) He looks sad. (Change this sentence into exclamatory sentences)

III. Make a list of all positive things that you can be thankful for in an A4 size sheet paper.

IV. Write a 'Biography' on your mother or father. Interview her / him and write the answers that you receive. You may include questions like:

- 1) Name and the meaning of his / her name.
2) Where did he / she grow up?
3) Name of the school he / she studied in
4) His / Her favourite subject and the reason.
5) Any memorable incident of his / her childhood.
6) How did he / she spend his / her leisure time?

V. See the image below and write a short paragraph in 10 -12 sentence about it.



VI. Write a letter to your friend telling him/ her about the things you have done in summer vacation and asking him / her about the things he/ she has done during summer vacation.

IX. Write 10 page handwriting in your writing notebook.

X. Write and Learn question and answer of Chapter 1 and 2.

HINDI (IV)

(क) निम्नलिखित अक्षरों को सही क्रम में लिखकर सार्थक शब्द बनाए :

बचागी , बलागु , रिपबार, लीतित,

(ख) इन शब्दों के दो-दो समानार्थक शब्द लिखे:

पृथ्वी, मनुष्य , पहाड़, सूरज , गृह , पेड़ , खुशबू , पुष्प

(ग) संज्ञा तथा सर्वनाम शब्द छाँटकर अलग अलग लिखे :

आप, जयपुर , हाथी , मेरा, इन्होंने, पंखा,
कबूतर, खिलौना, महात्मा गांधी, हम , तुम्हारा, यह

(घ) निम्नलिखित संयुक्त व्यंजन का प्रयोग करते हुए दो- दो शब्द लिखो:

क्ख, क्क , ल्ल , च्छ

(ङ) बताओ मैं कौन हूँ :

1. प्रथम कटे तो दर हो जाऊँ, अंत काटे तो बंद हो जाऊँ।

केला मिले तो खाता जाऊँ, बताओ मैं कौन हूँ ।

2. मेरी पूछ पर है हरियाली, तन(शरीर) है मगर सफ़ेद ।

खाने मई है काम आती , आब बोलो मेरा भेद ।

3. हरे पंखे वाली , लाल मेरी चोच ।

मिर्ची, अमरुद मेरी पसंद, मैं हूँ कौन ।

4. आठ पाँवों वाला मैं , जाल - जैसा घर मेरा ।

चीटी कीड़े मैं खाता , मैं हूँ कौन ।

(च) उचित शब्द से खाली स्थान भरो :

1. भाषा के वर्णों को लिखने के लिए जिन चिहनों का प्रयोग किया जाता है , उन्हें _____ कहते हैं ।

2. समाचार - पत्र पढ़ना भाषा का _____ रूप है ।

3. हिंदी हमारी _____ है ।

4. उचित का विलोम _____ होता है ।

5. तीव्र _____ का विलोम है ।

(छ) 'कल मैंने एक सपना देखा ' विषय पर 8-10 वाक्यों में एक अनुच्छेद लिखे ।

(ज) वाक्य बनाओ :

कठिन , सफलता , कीमती , बड़ा - सा, हिमालय

(झ) वर्ण विच्छेद कीजिये :

गिरिवर , हिमालय , देशवासी , संतान, गुरुदक्षिणा, लालमणि , गौरा, भारतीय

(ञ) अभी गरमी का दिन है निम्बू का शरबत की विधि लिखे और खुद बनाकर घर के प्रत्येक सदस्य को पिलाये ।

(ट) 10 पेज सुलेख लिखे ।

MATHS(IV)

1. Write number name both in Indian Number System and International Number System :

(i) 5059082 (ii) 603097 (iii) 1400317 (iv) 500005 (v) 471685 (vi) 105674

2. Solve in detail:

(i) IV (+) XXXVI (ii) XII (+) XVII (iii) XXII (-) XI

(iv) X (+) XV (-) VI (v) XX (-) XX (vi) XLII (-) II

3.Fill / Solve it:

(i) 50 lakhs = _____ millions

(ii) 800 thousands = _____ lakhs

(iii) 20 lakhs = _____ millions

(iv) Arrange in descending order: 4 lakhs, 200 thousands, 90 tens, 40 millions

(v) Form the largest and the smallest 6- digit numbers using all digits 6, 8, 4, 0 , 9 and 1 only once.

4. Simplification:

(i) $32 - 10 \div 2 \times 5$

(ii) $15 \div 5 \times 4 \div 2$

(iii) $39 - 18 \div 3 + 2 \times 3$

(iv) $25 \div 5 \times 8 + 6 - 12$

(v) $3 + 6 \times (5+4) \div 3 - 7$

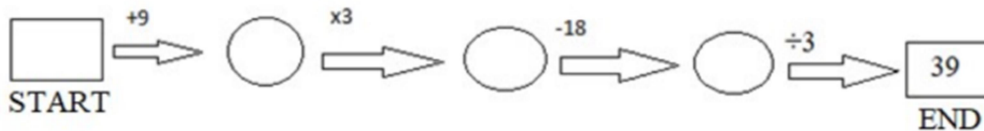
(vi) $(25 + 11) \times 2$

5. Learn and write square from 2 to 20.





6. Solve the problems with statement:

- (i) Harry spend ₹ 9875 on clothes and ₹1283 on shoes He has ₹ 15000 with him. How much money is left with him?.
- (ii) In an examination 75,236 students passed and 14,892 students failed. Find how many students appeared for the examination?
- (iii) What is the predecessor of the largest 7 digit number formed using the digits 0,1,9,7,4,8,6(without repeating the digits)?
- iv) What is the sum of the place values of 6 in the number 63,60,656 ?
- v) Ritwik went to the market with Rs C. He bought fruits for Rs. XL, a pencil for Rs .V and some grocery for Rs. L. How much money is left with him? (Express the answer in Roman Numeral)

7. End number is 39, What number Rishi put into the start box?



8. Solve the questions and find the missing number:

<p>I divide into 100 with no remainder. I am the ten thousands digit in 4, 759, 231. Who am I? </p>	<p>I am divisible by 3. I am an even number. I am the missing number in $48/x=8$. Who am I? </p>
<p>I am 43 less than 50. I am one more than the number of sides on a hexagon. Who am I? </p>	<p>I am the perimeter of a square with sides that are 2 inches long. I am an even number. Who am I? </p>

9. Solve the puzzle:

(i)

	+		+		=	18		
	+		=	13				
	-		=	5				
	+		+		×		=	<input style="width: 30px; height: 20px;" type="text"/>
	=	<input style="width: 30px; height: 20px;" type="text"/>		=	<input style="width: 30px; height: 20px;" type="text"/>		=	<input style="width: 30px; height: 20px;" type="text"/>

(ii) $6 : 36 :: 9 : ?$

(iii)

5	?	6	15
?	3	2	11
7	5	?	21
18	12	17	

SCIENCE(IV)**I. Unscramble the parts of the digestive system:**

1. ilerv - 2. smhotca – 3. nitetsine – 4. mertuc – 5. naus –
 6. redadalbgll – 7. outmh – 8. sehopugas - 9. ethet – 10.teugno –

II. A balanced diet must contain all the nutrients in proper proportion.

Reena wants to be fit and healthy for which she needs to include different food groups in right proportion. Help her to choose the right food items and complete the table given below:

FOOD GROUP	USE IN BODY	FOODS THEY ARE FOUND IN
PROTEINS		
CARBOHYDRATES		
FATS		
VITAMINS AND MINERALS		

III. Write the functions of :

- 1) Incisors 2) Canines 3) Premolars 4) Molars

IV. Fill in the blanks:

1. The _____ is the hard, white covering of the tooth.
 2. _____ carries nutrients and oxygen to the cells of our body.
 3. _____ The soft central portion of a tooth.
 4. The teeth which is used for tearing food is called _____.

V. Answer the following questions:

- Define digestion.
- Write any three uses of micro-organisms.
- Circle the odd one out on the basis of the statements given below :-
 - Organs of digestive system-Food pipe, stomach, small intestine, lungs
 - Methods of food preservation -Boiling, flossing, pickling, drying
 - Rich sources of fats- Butter, ghee, nuts, pulses
- Draw, colour and label the diagram of human digestive system.

VI. Take help of your mother to prepare Butter Milk for your family. List the various steps involved and also the benefits of the drink.

SST(IV)

I. Name them.

1. The city in India where you will see the Charminar.
2. This city has the Rock Garden.
3. It is known as the Pink City.
4. This important city of Assam is situated on the banks of the Brahmaputra River
5. This city is also known as Blue City.

II. Choose the correct answer.

1. The Thar Desert forms part of the state of _____.
 a. Rajasthan b. Madhya Pradesh c. Maharashtra
2. The areas directly managed by the central government are called _____.
 a. capitals b. states c. union territories
3. The _____ Islands lie in the Arabian Sea.
 a. Lakshadweep b. Andaman c. Nicobar
4. Winters are very cold in _____.
 a. Mumbai b. Delhi c. Chennai

III. Write the difference between the following:

1. Perennial river and Seasonal River
2. Tributary and Distributaries

IV. Define the following :

1. Cape 2. plains 3. valley 4. Coast 5. Bay 6. Island 7. Delta
8. Pass 9. Strait 10. Mountain Ranges

V. Answer in One word:

1. Which landforms are heavily populated?
2. What is the southernmost tip of the Indian Peninsula called?
3. Where does the Kalahari Dessert lie?
4. What forms when molten rock from deep inside the Earth rises to the surface?
5. What are slow moving rivers of ice called?
6. "Roof of the World" is?
7. Two famous Plateau in USA are?
8. Largest peninsula in the world.
9. World's Largest Island.

10. How are perennial rivers formed?

VI. Fill in the blanks:

- 1)_____ is the seventh largest country in the world.
- 2) Earlier Karnataka was called _____.
- 3) _____ is the newly formed state that is carved out of Andhra Pradesh.

VII. Guess who am I?

1. I am a newly constituted union territory, but earlier I was a state.
2. I am the highest mountain range. I am also known as 'abode of snow'.
3. I am hot and dry and mostly blow in the northern plains of India during summer season.
4. I share myself as the capital city of the two states of India.
5. I am a slow moving river of ice and origin of River Ganga.

VI) On a ½ sheet of chart paper; draw, colour and name any one landform of India.

VII) Draw, colour and label the four domains of the Earth. [On A4 size colour paper]

GENERAL STUDIES (CLASS-V)

I) Given below is a world map showing continents and oceans of the world. Study the map carefully and solve the riddles. (Note down the riddle questions also)



- (a) I am located in the northern part of the earth and I am covered with ice. Which ocean am I?
- (b) I have the largest desert in the world 'Sahara', and I am also known as the 'Dark Continent'.
- (c) I am the only continent with no deserts. Which continent am I?
- (d) I am the largest ocean in the world. I also have the deepest point called Mariana Trench. Which ocean am I?

II. Unscramble and write the names of the five oceans of the world given in column A. Also match them with the facts given in Column B .Write the facts in front of the ocean names. One example is given below:

1. Indian Ocean - (d) known as "Ratnakara" in Sanskrit

Column A

1. DANINI _____ OCEAN
2. RCTACI _____ OCEAN
3. USTONHR _____ OCEAN
4. FICAPIC _____ OCEAN
5. TLATANIC _____ OCEAN

Column B

- (a) Covers 30% of the earth surface
- (b) Also known as Antarctic Ocean
- (c) The smallest ocean in the world.
- (d) Known as 'Ratnakara' in Sanskrit
- (e) Derived from the Greek mythology meaning The 'Sea of Atlas'

TRANSLATION (Translate the following sentences in English)

1. उसने तुम्हे धोखा(Cheat) नहीं दिया।
2. आज अध्यापक ने हमें सजा(Punishment) दी।
3. क्या उसने चोरी की ?
4. रुद्र ने किताब क्यों फाड़ी ?
5. वह पेंटिंग बना चुका था।
6. हमने उसे आमंत्रित(invitation) नहीं किया था।
7. तुमने यह फिल्म कब देखी थी ?
8. हम सुबह से सब्जियां काट रहे थे।

