

## Revision Assignment

**Class : STD. V**

**Subject : English**

---

### SECTION - A

**A1. Read the passage carefully:-**

Yoga is the ancient Indian system to keep a person fit in body and mind. It is basically a system of self treatment. According to the yogic view, diseases, disorders and ailments are the results of some faulty ways of living, bad habits, lack of proper knowledge and unsuitable food. The diseases are thus the resultant state of short or prolonged malfunctioning of the body system. Since the root cause of disease lies in the mistakes of the individual, its cure also lies in correcting the mistakes by the same individual. Thus, yoga relies entirely on the effort of the patient to cure himself. The yoga expert shows only the path and works no more than as a counsellor. The yogic practice of treatment comprises three steps namely proper diet, proper yogic practice and proper knowledge of things concerning the self.

**A1.1. Answer these questions:-**

01. What is Yoga?
02. What is the benefit of Yoga?
03. What causes diseases, ailments and disorders?

**A1.2. Find out the following from the passage**

01. Two adjectives                      02. Two Verbs

**A1.3. Find the synonyms of the following from the passage:-**

01. Old                                      02. Faults                                      03. Cure

**A.2. Read the poem carefully:-**

In the middle of the city  
Is an open space called a park:  
It is difficult for us to do what we like there  
Even after dark.  
In the middle day of park, there is a statue,  
A huge man made of stone.  
We are not allowed to climb his legs or  
Scribble on his trousers,  
He has to be left alone,  
In the middle of the grass, there is some water  
Surrounded by an asphalt path;  
We are forbidden to fish or throw stones into it  
Or swim or take a bath

**A2.1 Choose the correct option:**

01. What is the open space called?  
(a) market      (b) playground                      (c) park                      (d) none of these
02. Whose statue is in the park?  
(a) a huge man   (b) an old man   (c) a young man   (d) none of these
03. What is not possible even after dark?  
(a) what they like                                      (b) what they want  
(c) what they don't like                                      (d) none of these

**A2.2. Find the antonyms of the following from the poem:-**

01. Tiny                                      02. Close                                      03. Easy

**A2.3. Pick out any two pair of rhyming words from the poem.**

### SECTION – B

**B1.1. Develop a story from the outlines given below: with suitable heading and moral.**

The mice in a house \_\_\_\_\_ afraid of the cat hold a meeting \_\_\_\_\_ one proposes to tie a bell round the cat's neck \_\_\_\_\_ all agree \_\_\_\_\_ who is to bell the cat? No mouse offers \_\_\_\_\_ the cat appears \_\_\_\_\_ all run away.

Moral

**B1.2. Write a letter to your father requesting him to buy a new bicycle for you.**

### SECTION – C

**C1.1. Do as directed**

01. The helicopter landed on \_\_\_\_\_ roof of a building. (Article)
02. Blood is \_\_\_\_\_ than water. (thick) (Correct degree of an adjective)
03. A large \_\_\_\_\_ gathered in the street. (Collective noun)
04. He is a man of \_\_\_\_\_ (strong) (Abstract noun)
05. my best friened and his family are moving to chennai. (Punctuate it)
06. John is my best friend. (Write the parts of speech of the underlined word)
07. Where do you want to go today? (Write the kind of sentence)
08. The man and his wife were working in their garden. (choose subject and predicate and write it)
09. Tom and Jerry / my / is / favourite / cartoon / movie. (Re-arrange the jumbled words and then make a meaningful sentence)
10. The fish is eaten by the cat. (Change into active voice)
11. They invited us to their party. (Frame a question using Do / Does / Did)
12. I \_\_\_\_\_ six phone calls since lunch time. (answer) (Present Perfect Tense)
13. Rohan and Sania like to play and games. (change it into simple past tense)
14. Does any actor like to play the role of the prince? (Pick out nouns and write its gender)
15. Her hair is very curly. (Write whether the underlined word is countable or uncountable noun).
16. \_\_\_\_\_ children understood the difference. (few / little)
17. Simran said, "He bought an iPhone." (Change into indirect speech)
18. I love my mother. (Change into active voice)
19. The sun \_\_\_\_\_. (Add suitable predicate)
20. I \_\_\_\_\_ dinner when the visitors arrived (Cook) (Past Continuous Tense)

**C1.2. Write the meaning of the following words:-**

01. Sprouting 02. Enormous 03. Accustom 04. Fuming

**C1.3. Make a meaningful sentence with the following woods**

01. Laughed 02. Fainted 03. Adventure

## REVISION ASSIGNMENT

**Class : STD. V**

**Subject : Science**

---

**I. Multiple Choice Questions:**

01. Which of the following is a transparent object?  
(a) Clean water      (b) Dirty water      (c) Book      (d) Wood
02. What is the concept on which the Jack used by a person to lift a car works.  
(a) Screw      (b) Wedge      (c) Lever      (d) Pulley
03. Which of the following forms a pairs of immiscible liquids  
(a) Oil and water      (b) Water and Milk  
(c) Juice and water      (d) Alcohol and water
04. Which of the following is not an example of an igneous rocks?  
(a) Granite      (b) Pumice      (c) Obsidian      (d) Peat

**II. Definitations**

- (a) Lava      (b) Food Chain      (c) Equator      (d) Orbit

**III. Give reasons :**

01. Neptune looks blue in colour.
02. Earthworms are considered helpful for plants.
03. Deforestation on the mountains can lead to land slides.
04. We should use coal and petrol carefully.

**IV. Answer the following questions:-**

01. What are metallic minerals?
02. What is Melting?
03. What is a simple machine?
04. What are shadows?
05. Why is Sewing Machine called a complex machine?
06. What is called Physical change? Give example.
07. What is the difference between Magma and Lava?
08. What is the difference between Sedimentary igneous and metamorphic rocks?

**V. Drawing**

Draw a neat labelled diagram of Solar System.

**REVISION ASSIGNMENT**  
**CLASS - V**  
**HINDI**

1. अपठित गद्यांश को पढ़कर प्रश्नों के उत्तर लिखें –  
पहलवान कश्मीर घाटी का सर्वाधिक मनोरम स्थान है। उसकी ऊँचाई समुद्रतल से 2200 मीटर है। चारों ओर ऊँचे-ऊँचे पर्वत खड़े हैं और बीच में लीडर नदी बहती है। अमरनाथ यात्रा पर जाने वाले यात्री यहीं पर एकत्रित होते हैं। सबकी एक-ही कामना होती है – अमरनाथ जी के दर्शन। अमरनाथ अमरावती के तट पर स्थित है। पहलगाम से यहाँ तक की यात्रा में तीन दिन लगते हैं और चौथे हदन यात्री दर्शन करके लौटता है। यह यात्रा श्रावण-पूर्णिमा (रक्षा बंधन) के दिन संपन्न होती है।  
प्रश्नों के उत्तर दे–  
(क) पहलगाम किस घाटी का सर्वाधिक मनोरम स्थान है?  
(ख) अमरनाथ किस नदी के तट पर स्थित है?  
(ग) यात्रियों को दर्शन करके किस दिन लौटना होता है?  
(घ) पहलवान की ऊँचाई समुद्रतल से कितनी है?  
(ङ) अमरनाथ-यात्रा किस दिन संपन्न होती है?
2. प्रश्नों के उत्तर लिखें –  
(क) विराम चिह्न किसे कहते हैं? (ख) क्रिया विशेषण किसे कहते हैं? उदाहरण सहित लिखें।
3. दो-दो पर्यायवाची शब्द लिखें–  
(क) सुबह – .....  
(ख) आग – .....
4. विलोम शब्द लिखें  
(क) रक्षक x ..... (ख) देव x ..... (ग) आरंभ x .....
5. लिंग बदले –  
(क) बुद्धिमान – (ख) नौकर – (ग) लुहार –
6. वचन बदलें–  
(क) कथा – (ख) पलक – (ग) छात्र –
7. निर्देशानुसार कार्य करे –  
(क) राष्ट्रीय में मूल शब्द क्या है? (राष्ट्र/राष्ट्रता)  
(ख) दो कर्म रखने वाली क्रिया क्या कहलाती है? (सकर्मक क्रिया/द्विकर्मक क्रिया)  
(ग) 'मधुरिमा ने गीत लिखा।' – वाक्य में काल है – (वर्तमान काल /भूतकाल)  
(घ) बैंक ..... कितनी गाड़ियाँ खड़ी हैं। (के अंदर/के बाहर)  
(ङ) 'नाग' शब्द के दो अर्थ लिखिए।
8. निबंध –  
(क) कंप्यूटर (ख) अनुशासन का महत्व
9. मुहावरे का अर्थ लिखें।  
(क) घुटने टेकना (ख) चिकना घड़ा

**SECTION-A****01. Fill in the blanks:-**

- (a) Two arms of an angle meet at the \_\_\_\_\_ of the angle.
- (b) A line which is not horizontal or vertical is a \_\_\_\_\_ line.
- (c)  $6000 \text{ kl} = \text{_____ } l$
- (d)  $7 \text{ m } 76 \text{ cm} = \text{_____ cm}$
- (e) \_\_\_\_\_ is a collection of information which can be recorded and used for interpretation.
- (f) Perimeter of a square having side 5 cm is \_\_\_\_\_.
- (g) A right angle always measure \_\_\_\_\_.
- (h) When two lines intersect each other at  $90^0$ , they are called \_\_\_\_\_ lines.

**SECTION – B**

- 02. Add :  $25 \text{ min } 40 \text{ sec} + 35 \text{ min } 30 \text{ sec}$ .
- 03. Subtract :  $11.36 \text{ l}$  from  $19.09 \text{ l}$ .
- 04. Find the area of a square whose side is 6 cm.
- 05. Draw a line segment of length 6.5 cm.
- 06. Multiply :  $3.6 \times 1.1$
- 07. Divide :  $0.36 \div 12$
- 08. Solve the equation :  $x + 3 = 6$
- 09. Find the perimeter of a rectangle whose  $l = 5 \text{ cm}$ ,  $b = 3 \text{ cm}$ .
- 10. Evaluate :  $y - 4$  when  $y = 5$ .

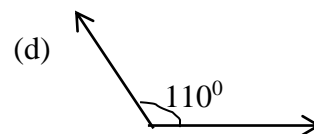
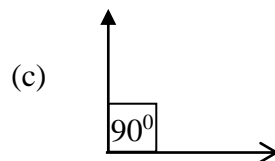

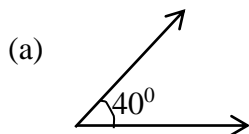
**SECTION – C**

- 11. Express :
  - (a) 569 seconds in minutes and seconds
  - (b) 2 hours in seconds
- 12. Write the algebraic expression
  - (a) A plumber had cut a pipe into 4 equal parts. What is the length of each part?
  - (b) Seeta had 4 times as many colour pencils as Ravi. How many colour pencil did she have?
- 13. The length and breadth of a book are 15 cm and 10 cm respectively. If the volume of the book is  $300 \text{ cm}^3$ , find the height of the book.
- 14. A house has a boundary of pentagonal shapes with each side measuring 200m. Find the perimeter of the boundary of the house.
- 15. A movie started at 4:00 P.M. and ended at 6:30 P.M. What was the duration of the movie?

**SECTION – D**

- 16. The area of a chart paper is  $7500 \text{ cm}^2$ . If the breadth of the chart paper is 50cm, find the length of the chart paper.
- 17. The weight of 7 bricks is 8.4 kg, what is the weight of one brick if each brick has the same weight?

18. Identify the angles and write the name.



19. Rohit and Himanshu were painting a house. Rohit painted for 3 h 5 min before taking a break for lunch. Thereafter, Himanshu painted the house for another 2 h 45 min. How much time in all did they spend on painting the house?

20. The table given below show the marks scored out of 100 by a class of 40 students in their maths test. Depict this data in the form of a circle graph.

Marks Scored	Above 80	Between 70 and 80	Between 50 and 70	Below 50
No. of Students	20	5	5	10

**I. Multiple Choice Questions:**

01. The Europeans learnt the place value system from  
(a) China (b) Russia (c) Japan (d) Arabs
02. “Be your own Lamp” who said this?  
(a) Mahatma Gandhi (b) Buddha (c) Socrates (d) None of these
03. The headquarter of the UN is in \_\_\_\_\_.  
(a) India (b) Pakistan (c) England (d) USA
04. The Security council has \_\_\_\_\_ members.  
(a) 15 (b) 10 (c) 25 (d) 5
05. When was the East India Company set up?  
(a) 1400 A.D. (b) 1600 A.D. (c) 1800 A.D. (d) 1500 A.D.

**II. Answer in one word**

01. Who set up the Indian National Congress in the year 1885?
02. Last Governor General of India.
03. Who formed the Indian National Army?
04. The place where the Portuguese landed up to trade with India.
05. The full form of WHO.

**III. Define the following:-**

01. Movement      02. Slave      03. Revolt      04. Swadeshi      05. Bhojpatra

**IV. Write a short note on UNO.**

**V. Answer the following questions:-**

01. Write any three purposes with which the United Nations was established.
02. How were the Indian weavers affected by import of mill made cloth?
03. Why were the British rulers afraid of the Swadeshi Movement?
04. How did the British rulers react to protests by Indian Leaders?
05. What was Gandhiji’s Philosophy of life?

**VI. Correct the statement**

01. Abraham Limcoln has spirit to do poorly for humanity.
02. The olive branches are a symbol of corruption.
03. The UNO functions through four main organs.
04. Jawaharlal Nehru was the president of India.